



Bridge and Patricbourne CEP School

KS2 SATS 2018

14th May - 17th May 2018.

Week commencing: **Monday 14th May 2018**

Date	Activity
Monday 14 May	English grammar, punctuation and spelling papers 1 (45mins) and 2 (15mins)
Tuesday 15 May	English reading (60mins)
Wednesday 16 May	Mathematics papers 1(30mins) and 2 (40mins)
Thursday 17 May	Mathematics paper 3 (40mins)

Explaining the Changes

A new set of tests were introduced in May 2016 to replace the existing ones.

There are no level 6 tests: all pupils will take just one set of tests. The tests will include a number of questions to stretch the most able pupils.

Explaining the Changes

Scaled Scores

- All test outcomes at both KS1 and KS2 will be reported as scaled scores.
- The national standard will be 100.
- Raw scores (the number of marks awarded for each subject) will be translated to scaled scores (a comparable score for each subject) using a conversion table.
- Pupils will receive a raw score, a scaled score and confirmation of attainment of the national standard.
- Mark of 110 or more will be judged as achieving the higher standard.

The English Tests

There is a greater focus on fictional texts.

The structure of the test is similar to the previous KS2 reading tests.

There is a greater emphasis on the comprehension elements of the new curriculum.

- **Reading** - 50 marks
- **Grammar, Punctuation and Spelling Test** – 50 marks including :
 - Spelling test – 20 words- 20 marks

A Teacher Assessment of writing ability will be made in
May/June 2018.

Reading Test

The Reading Test

- For this test there will be one reading book and one answer booklet.
- The test will last for one hour (including reading time).
- There will be a total of 50 marks available.
- There will be a range of texts including fiction, non fiction and poetry.

Marks will be awarded as follows:

- Multiple choice or other selected responses: 10% - 30%
- Short responses: 40% - 60%
- Extended responses: 20% - 40%

Reading

20

Into your pitiful shell, so brittle and thin

In this line, the word *brittle* is closest in meaning to...

Tick one.

shiny.

soft.

delicate.

rough.

Some questions will test the children on their understanding of vocabulary.

1 mark


29

The iguanodonts are described as *inoffensive brutes*...

Look at the paragraph beginning: *I do not know how long...* (page 8).

Explain how the descriptions of the iguanodonts in this paragraph support the idea that they were both *inoffensive* and *brutes*.

Use evidence from the text to support your answer.



Others will require the children to deduce answers by using words or phrases as evidence.

25

Circle the correct option to complete each sentence below.

(a) The story is told from the perspective of...

Professor
Summerlee.

Lord John.

Malone.

Professor
Challenger.

1 mark

(b) At the start of the extract the men entered the forest...

carefully.

quickly.

fearfully.

noisily.

1 mark

(c) There, they came to a patch where the stream was...

smaller.

bigger.

faster.

slower.

1 mark

(d) The ferns here were spaced...

regularly.

randomly.

carefully.

equally.

1 mark

Some questions will ask the children to find literal answers from the texts.

Grammar and Punctuation

Changes to the Grammar, Punctuation and Spelling Test:

- There is a greater focus on knowing and applying grammatical terminology with the full range of punctuation tested
- Technical terms in grammar will be tested.
- There will be one test paper for grammar, punctuation and vocabulary and one test paper for spelling. The design of the tests is unchanged.
- The grammar test will last for one hour and there will be a total of 50 marks available.
- In the grammar test, two thirds of the marks will be for multiple choice questions. The remaining questions will require pupils to write a longer answer.

SPAG test examples:

1 Tick the sentence that must end with a **question mark**.

- Tick one.
- What I wanted had already sold out
- Ask Ryan what he thinks about it
- What time will the film start
- I didn't know what to say

13 Tick one box to show which part of the sentence is a **relative clause**.

The table which is made of oak is now black with age.

Complete a table

15 Tick one box in each row to show how the **modal verb** affects the **meaning** of the sentence.

Sentence	Modal verb indicates certainty	Modal verb indicates possibility
It will be very cold tomorrow.		
John might have missed the train.		
Ann can speak six languages.		
You could finish your work by the end of the lesson.		

Completing sentences:

6 Circle one verb in each underlined pair to complete the sentences using **Standard English**.

We was / were planning to hold a cake sale at school.

I was / were chosen to design the posters.

Writing sentences:

38 Write a sentence using the word point as a **verb**.
Do not change the word.
Remember to punctuate your sentence correctly.

1 mark

Write a sentence using the word point as a **noun**.
Do not change the word.
Remember to punctuate your sentence correctly.

1 mark

Circle all the **pronouns** in the sentence below.

They bought new jumpers for themselves and a warm scarf

Tick one box in each row to show how the **modal verb** affects the **meaning** of the sentence.

Sentence	Modal verb indicates certainty	Modal verb indicates possibility
It will be very cold tomorrow.		
John might have missed the train.		
Ann can speak six languages.		
You could finish your work by the end of the lesson.		

Spelling

There are 20 spelling sentences.

The spelling words are tested within the context of a sentence.

As the sentences are read out to the children, they fill in the correct spellings on their copy of the text.

Spelling

1. Sara wanted to be an explorer and _____ new lands.
2. The spy was sent on a secret _____.
3. For PE lessons, your clothes should be _____ and comfortable.
4. The _____ showed which way to go.
5. China is a large _____.
6. Laura won a medal for _____.
7. Not all berries are _____.
8. Sit up straight to improve your _____.

Maths Tests

- There will be three papers: 1 arithmetic paper and 2 mathematical reasoning papers.
- There will not be a mental maths paper instead an arithmetic test has been introduced to assess basic mathematical calculations.

Questions in the **arithmetic test** will cover:

- straightforward addition and subtraction
- more complex calculations with fractions
- long division and long multiplication

Gridded paper will be provided in answer spaces for questions on the arithmetic paper and for some questions on paper 2.

Maths Tests

Arithmetic Test

- There will be 36 questions in the arithmetic test and there will be 40 marks available most of which will be worth one mark.
- The test will last 30 minutes.

Mathematical Reasoning Papers

- There will be two mathematical reasoning papers.
- Each paper will be of 40 minutes duration with a total of 35 marks per paper available.

Maths test examples

5 $1,034 + 586 =$

1 mark

34 $37 \overline{) 2331}$

Show your method

2 marks

4
$$\begin{array}{r} 2376 \\ \times 15 \\ \hline \end{array}$$

Show your method

2 marks

2 $1\frac{1}{7} - \frac{3}{7} =$

1 mark

Questions taken from Paper 1 - Arithmetic

16

$$1,440 \div 12 =$$

A grid for working out the division problem. It consists of 20 columns and 3 rows of small squares.

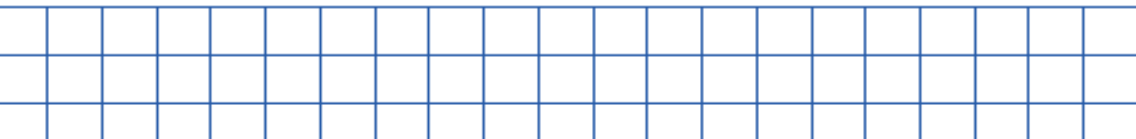
20

$$5,756 + 8,643 =$$

A grid for working out the addition problem. It consists of 20 columns and 3 rows of small squares.

26

$$\frac{1}{4} \times \frac{1}{8} =$$

A grid for working out the multiplication problem. It consists of 20 columns and 3 rows of small squares.

Questions taken from Paper 2 - Reasoning

What is 444 minutes in hours and minutes?

hours	minutes
-------	---------

1 mark

Write the two missing digits to make this **long multiplication** correct.

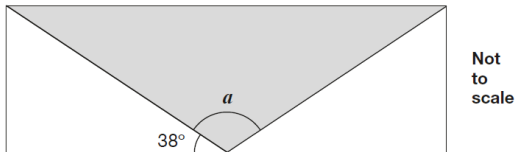
$$\begin{array}{r} \\ 4 \\ \\ \times \\ \hline 2 4 6 \\ 8 2 0 \\ \hline 1 0 6 6 \end{array}$$

2 marks

Reasoning test examples:

Shape problems:

- 15 A shaded **isosceles** triangle is drawn inside a rectangle.



Calculate the size of angle a .

Show your method

a is

°

2 marks

Multi-step word problems:

- 16 Large pizzas cost £8.50 each.
Small pizzas cost £6.75 each.
Five children together buy one large pizza and three small pizzas.
They share the cost equally.

How much does each child pay?

Show your method


£

2 marks

6

Write the missing digits to make the addition correct.

Missing information:



$$\begin{array}{r} 1 \square 1 \\ + \square 1 \square \\ \hline 900 \end{array}$$

On the day!

- Breakfast – make sure you eat a good breakfast and have a drink.
- Please bring in a water bottle to keep hydrated
- Get to school on time!
- If you're poorly try and come in – you can always go home after the test.
- If not – you must ring the office ASAP on that morning so we can make alternate arrangements.

Revision Guides

Schofield & Sims

www.schofieldandsims.co.uk/

